

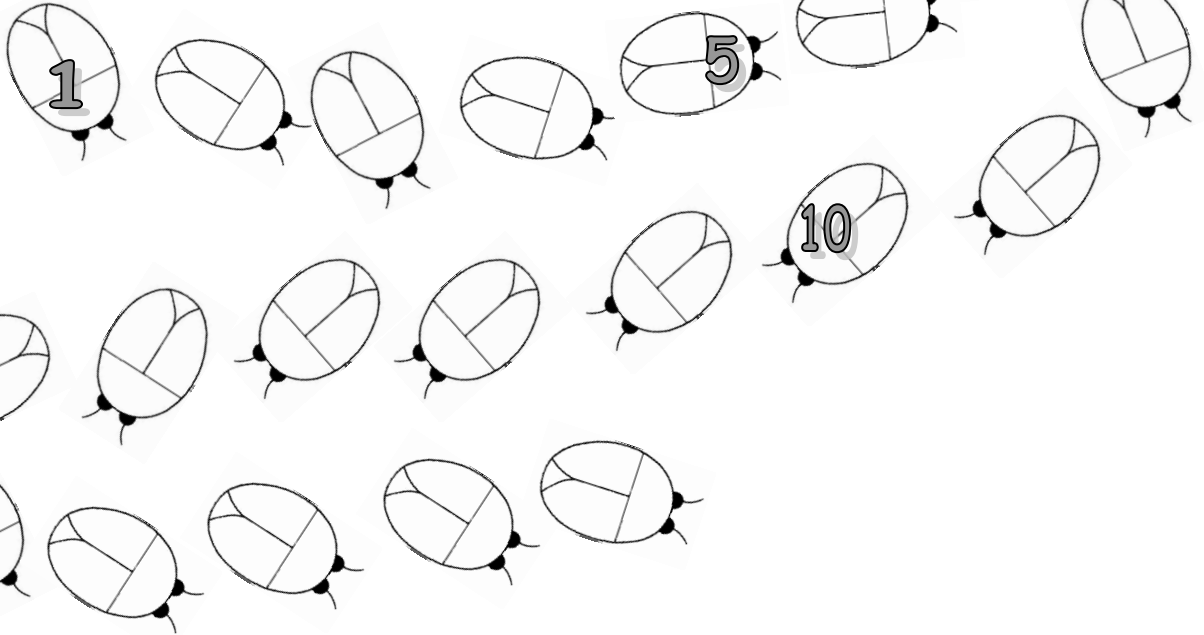


Επανάληψη



1. Γράφω τους αριθμούς με τη σειρά.
Μαθαίνω να μετρώ απ' έξω μέχρι το 20.



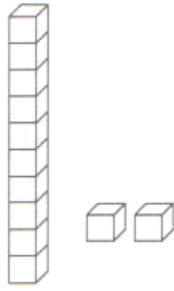
2. Γράφω το όνομα του αριθμού ή τον αριθμό που λείπει.

Δέκα	15
Έντεκα	20
Δώδεκα	10
Δεκατρία	13
Δεκατέσσερα	16
Δεκαπέντε	14
Δεκαέξι	17
Δεκαεφτά	18
Δεκαοχτώ	11
Δεκαεννιά	12
Είκοσι	19

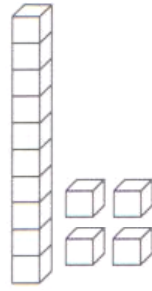


Επανάληψη

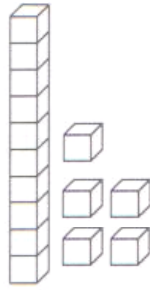
3. Γράφω τον αριθμό που δείχνουν οι κύβοι.



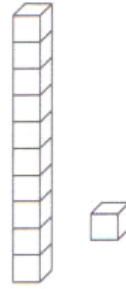
.....



.....



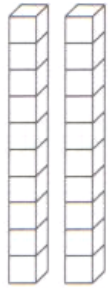
.....



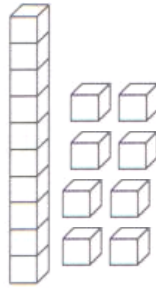
.....



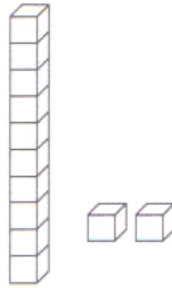
.....



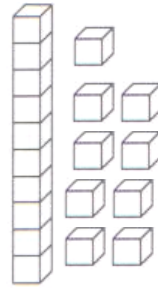
.....



.....



.....

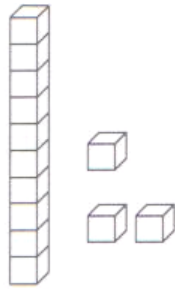


.....

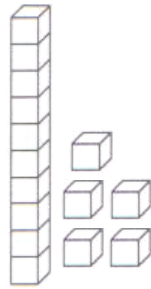


.....

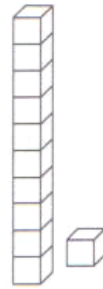
4. Κυκλώνω το σωστό αριθμό



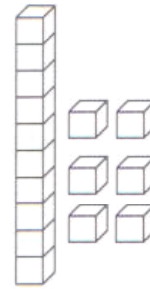
10 4 13



16 15 17



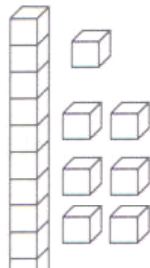
10 11 12



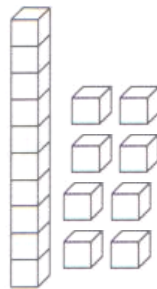
16 18 19



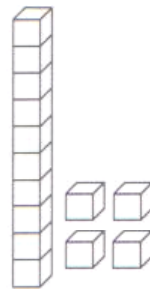
1 11 10



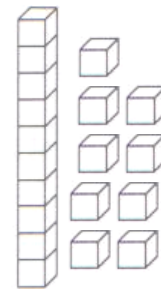
17 7 16



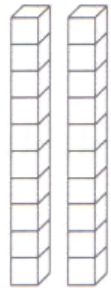
13 11 18



11 14 4




9 10 19

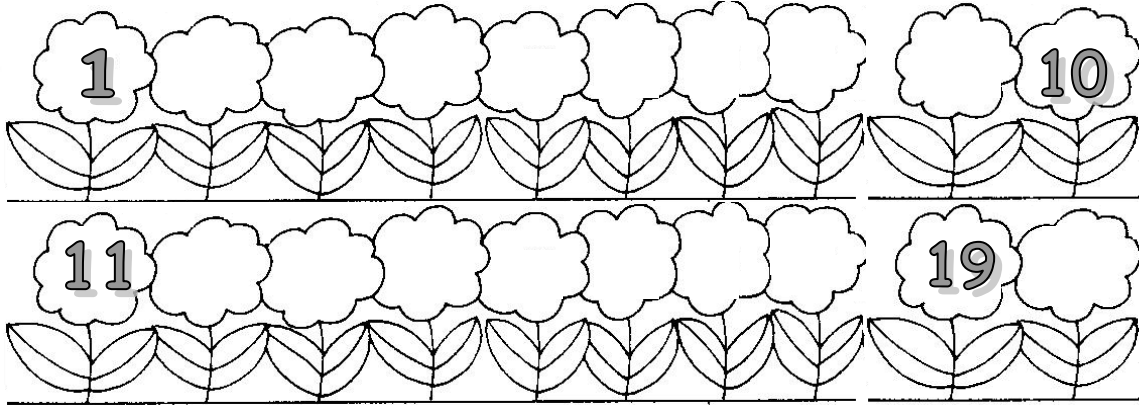


12 20 2

Επανάληψη



1. Γράφω τους αριθμούς με τη σειρά.
Μαθαίνω να μετρώ απ' έξω μέχρι το 20.



2. Γράφω τον αριθμό που είναι μετά

11 17 13 15 9
18 14 12 10 19

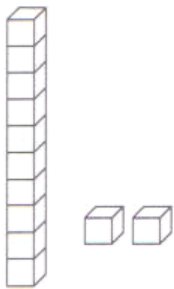


3. Γράφω τον αριθμό που είναι πριν

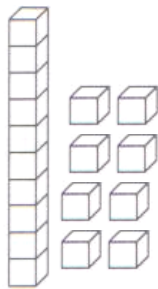


11 17 13 15 20
18 14 12 10 19

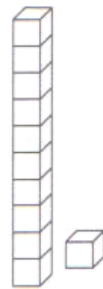
4. Γράφω τον αριθμό που ταιριάζει



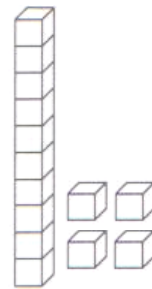
.....



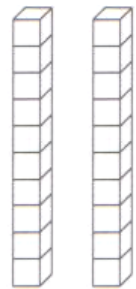
.....



.....



.....



.....

